

EXAMINATIONS COUNCIL OF ESWATINI  
Eswatini Primary Certificate Examination

CANDIDATE  
NAME

CENTRE  
NUMBER

|  |  |  |  |
|--|--|--|--|
|  |  |  |  |
|--|--|--|--|

CANDIDATE  
NUMBER

|  |  |  |  |
|--|--|--|--|
|  |  |  |  |
|--|--|--|--|

---

**PRACTICAL ARTS AND TECHNOLOGY**

**640/02**

**October/November 2022**

**Paper 2**

**2 hours**

---

**READ THESE INSTRUCTIONS FIRST**

Write your candidate name, centre number and candidate number on the spaces provided.  
Write your answers using a dark blue or black pen in the spaces provided.  
This paper consists of **four** (4) sections; (**A, B, C** and **D**).

Answer all questions in sections **A, B, C** and **D**.  
Do **not** use tipp-ex for erasing.

All drawings, graphs and tables should be done in pencil.  
The number of marks is given in [ ] at the end of each question.

| <b>For Examiner's use</b> |  |
|---------------------------|--|
| Section <b>A</b>          |  |
| Section <b>B</b>          |  |
| Section <b>C</b>          |  |
| Section <b>D</b>          |  |
| <b>TOTAL</b>              |  |

---

This document consists of **12** printed pages.

**SECTION A**  
**ARTS AND CRAFT**

**QUESTION 1**

A. (i) State the uses of the following tools in art:

| TOOL      | USE            |
|-----------|----------------|
| Eraser    | .....<br>..... |
| 2B Pencil | .....<br>..... |

**Table 1.1**

[2]

(ii) Name **two** materials used to make paper.

1.....

2..... [2]

(iii) Describe **three** ways in which paper can be used in art.

1.....


2.....

3..... [3]

B. Draw and colour a named product made from clay.

[3]

C. Study the picture in **Fig.1** below and answer the questions that follow:



**Fig. 1**

- (i) What is the name of the art used to make the product above?  
.....[1]
- (ii) Name **three** materials used to make this product.
  - 1.....
  - 2.....
  - 3.....[3]
- (iii) State **one** use of the above product.  
.....[1]

D. Explain the function of the following products:

| PRODUCT      | FUNCTION       |
|--------------|----------------|
| Wooden spoon | .....<br>..... |
| Basket       | .....<br>..... |
| Doilies      | .....<br>..... |

**Table 1.2**

[3]

E. Differentiate between relief carving and carving in the round.

.....

.....

.....

.....

[2]

**[Total: 20 Marks]**

SECTION B

MUSIC AND DRAMA

QUESTION 2

A. (i) Name **one** material used when making each of the musical instruments below:



| MUSICAL INSTRUMENTS   | MATERIAL     |
|---|--------------|
|  <p style="text-align: right;"><b>Fig. 2.1</b></p> | <p>.....</p> |
|  <p style="text-align: right;"><b>Fig. 2.2</b></p> | <p>.....</p> |

Table 2

(ii) Name **two** groups of people who play the instruments shown above. [2]

**Fig. 2.1**.....

**Fig. 2.2**.....[2]

(iii) State **two** ways people can make money from the above instruments.

1.....

.....

2.....

.....[2]

B. Explain **two** reasons why people in Eswatini play musical instruments.

1.....

.....

2.....

.....[4]

C. Differentiate between a wind and a string instrument.

.....  
.....  
.....  
.....[2]

D. Your school has been invited to perform at the King's birthday celebration.

(i) Suggest any **two** traditional performances that can be done on this day.

1.....  
2.....[2]

(ii) Discuss **three** ways an actor can follow to prepare for a performance.

.....  
.....  
.....  
.....  
.....  
.....  
.....  
.....  
.....  
.....  
.....[6]

[Total: 20 Marks]

SECTION C  
ENTREPRENEURIAL SKILLS

QUESTION 3

A. Define the following terms:

(i) Purchases

.....  
.....[1]

(ii) Markup

.....  
.....[1]

(iii) Overheads

.....  
.....[1]

B. What is the act of putting money where it will grow?

.....[1]

C. Lindo wants to start a business and needs your assistance.

(i) Explain the importance of conducting a market research before starting a business.

.....[1]

(ii) Suggest the **two** ways of advertising the business.

1.....

2.....[2]

(iii) Describe in **two** points the importance of saving money in the business.

1.....

.....

2.....

.....[2]

D. Study the picture labelled **Fig. 3** below and answer the questions that follow:



**Fig. 3**

(i) What is the name of the business shown in **Fig. 3** above?  
 .....[1]

(ii) State the main function of this business.  
 .....  
 .....[1]

(iii) Mention **two** ways used by this business to communicate with its customers.  
 1.....  
 2.....[2]

(iv) State **two** important roles played by producers in eSwatini.  
 1.....  
 2.....[2]

E. Micro-lenders and Co-operatives are important in our society.

(i) State **one** similarity between micro lenders and co-operatives  
 .....  
 .....[1]



(ii) Mention **two** differences between micro-lenders and co-operatives.

1.....  
.....  
.....[2]

2.....  
.....  
.....[2]

**[Total: 20 Marks]**

**SECTION D**  
**TECHNOLOGICAL DESIGN**

**QUESTION 4**

**A.** State the **two** types of beads.

1.....

2.....[2]

**B.** Give **one** use for each of the following metals:

| METAL  | USES           |
|--------|----------------|
| Gold   | .....<br>..... |
| Steel  | .....<br>..... |
| Copper | .....<br>..... |

**Table 4**

**C.** Renewable resources are important in our daily activities.

[3]

(i) Give **two** examples of renewable resources.

1.....

2.....[2]

(ii) State the importance of conserving non-renewable resources.

.....

.....[1]

(iii) Differentiate between renewable and non-renewable sources of energy.

.....

.....[2]

D. Study the picture **Fig. 4** below and answer the questions that follow.



**Fig. 4**

(i) What is the name of the structure shown in **Fig. 4**?  
.....[1]


(ii) Suggest any **three** materials used to reinforce this structure.  
1.....  
2.....  
3.....[3]

(iii) Explain the importance of the structure shown in **Fig. 4**.  
.....  
.....  
.....  
.....[2]

E. Designs are important in art.

(i) Differentiate between a motif and a pattern.  
.....  
.....  
.....  
.....[2]

- (ii) Design and draw a motif and a colorful pattern of your choice to show the connection in the spaces provided below.



[2]

[Total: 20 Marks]